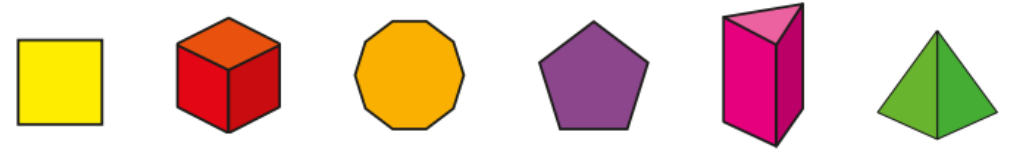
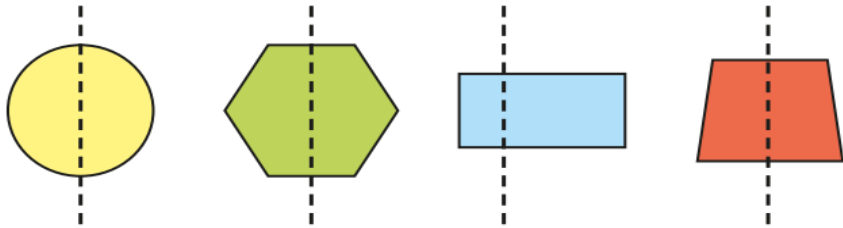
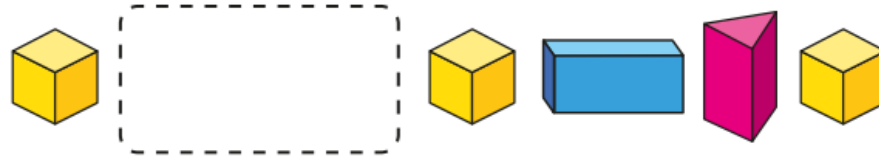


Year 2- Shape

Which lines of symmetry are correct?




Which shapes fit the pattern?



Key vocabulary:

2D shapes
3D shapes
Sides
Vertices
Symmetry
Faces
Edges

Tiny draws a 2-D shape.



Do you agree with Tiny?

Why?

Key questions:

What is a side?

How can you count the sides of a shape accurately?

How many sides does a _____ have?

Does a shape with _____ sides always look the same?

Can you think of some examples?

What is the name of a shape with _____ sides?